


विषय :- हिन्दी

कक्षा : तीसरी

दिनांक :

नाम :

निरीक्षक : 

क्रमांक	प्रश्न	
प्र.1	<p>नीचे दिए गए गद्यांश को पढ़कर प्रश्नों के उत्तर लिखिए -</p> <p>किसी जंगल में एक सिंह रहता था। वह प्रतिदिन कई पशुओं का शिकार करता था। जंगल के सभी पशु उससे डरते थे। एक दिन पशुओं ने सभा की। उन्होंने सिंह के भोजन के लिए प्रतिदिन एक पशु भेजने का निश्चय किया। सिंह पशुओं का प्रस्ताव सुनकर राजी हो गया।</p> <p>(i) सिंह कहाँ रहता था ?</p> <p>(ii) जंगल के पशु उससे क्यों डरते थे।</p> <p>(iii) पशुओं ने मिलकर क्या निश्चय किया।</p> <p>(iv) रिक्त स्थान भरिए -</p> <ul style="list-style-type: none"> जंगल के सभी _____ उससे डरते थे। एक दिन पशुओं ने _____ की। 	
प्र.2	<p>उचित विशेषण लिखिए :-</p> <p>(i) _____ फूल</p> <p>(ii) _____ कौआ</p> <p>(iii) _____ सूरज</p> <p>(iv) _____ मोर</p> <p>(v) _____ लड़का</p> <p>(vi) _____ केले</p>	

क्रमांक	प्रश्न																
प्र.3	<p>विशेषण एवं विशेष्य छाँटकर लिखिए -</p> <table><tr><td></td><td>विशेषण</td><td>विशेष्य</td></tr><tr><td>(i)</td><td>यह सड़क चौड़ी है ।</td><td></td></tr><tr><td>(ii)</td><td>राजा बहुत दयालु था ।</td><td></td></tr><tr><td>(iii)</td><td>गिलास में दूध काम है ।</td><td></td></tr><tr><td>(iv)</td><td>गोल रोटी बनाओ ।</td><td></td></tr></table>		विशेषण	विशेष्य	(i)	यह सड़क चौड़ी है ।		(ii)	राजा बहुत दयालु था ।		(iii)	गिलास में दूध काम है ।		(iv)	गोल रोटी बनाओ ।		
	विशेषण	विशेष्य															
(i)	यह सड़क चौड़ी है ।																
(ii)	राजा बहुत दयालु था ।																
(iii)	गिलास में दूध काम है ।																
(iv)	गोल रोटी बनाओ ।																
प्र.4	<p>उचित क्रिया शब्द भरकर वाक्य पूरे करिए -</p> <p>(i) मैं बाज़ार _____ हूँ । (भागता / जाता)</p> <p>(ii) कमरे में पंखा _____ रहा है । (चल / दौड़)</p> <p>(iii) मछलियाँ _____ रही हैं । (कूद / तैर)</p> <p>(iv) तुम लोग कब _____ ? (खाए / आए)</p>																
प्र.5	<p>दो - दो पर्यायवाची शब्द लिखिए -</p> <p>(i) आँख</p> <p>(ii) आग</p> <p>(iii) पर्वत</p> <p>(iv) घर</p> <p>(v) माँ</p>																
प्र.6	<p>उलटे अर्थ वाले शब्द लिखिए -</p> <p>(i) सरल</p> <p>(ii) गीला</p> <p>(iii) अपना</p> <p>(iv) लेना</p> <p>(v) रात</p> <p>(vi) पास</p>																
प्र.7	<p>सही जोड़े जमाइए -</p> <table><tr><td>परिश्रम करने वाला</td><td>ग्रामीण</td></tr><tr><td>गाँव में रहने वाला</td><td>दैनिक</td></tr><tr><td>किसी से न डरने वाला</td><td>परिश्रमी</td></tr><tr><td>हर दिन होने वाला</td><td>मांसाहारी</td></tr><tr><td>माँस खानेवाला</td><td>निडर</td></tr></table>	परिश्रम करने वाला	ग्रामीण	गाँव में रहने वाला	दैनिक	किसी से न डरने वाला	परिश्रमी	हर दिन होने वाला	मांसाहारी	माँस खानेवाला	निडर						
परिश्रम करने वाला	ग्रामीण																
गाँव में रहने वाला	दैनिक																
किसी से न डरने वाला	परिश्रमी																
हर दिन होने वाला	मांसाहारी																
माँस खानेवाला	निडर																

क्रमांक	प्रश्न											
प्र.8	<p>शब्दों के अर्थ लिखिए -</p> <table><tr><td>(i) अहाता</td><td>(ii) खोल</td></tr><tr><td>(iii) लर</td><td>(iv) कराहना</td></tr><tr><td>(v) धान</td><td>(vi) उदास</td></tr><tr><td>(vii) अदभूत</td><td>(viii) तलाश</td></tr><tr><td>(ix) रोशनी</td><td>(x) धोखा</td></tr></table>	(i) अहाता	(ii) खोल	(iii) लर	(iv) कराहना	(v) धान	(vi) उदास	(vii) अदभूत	(viii) तलाश	(ix) रोशनी	(x) धोखा	
(i) अहाता	(ii) खोल											
(iii) लर	(iv) कराहना											
(v) धान	(vi) उदास											
(vii) अदभूत	(viii) तलाश											
(ix) रोशनी	(x) धोखा											
प्र.9	<p>प्रश्नों के उत्तर दीजिए -</p> <ul style="list-style-type: none">(i) मीरा बहन का जन्म कहाँ हुआ था ?(ii) मीरा बहन अपना समय कैसे बिताती थी ?(iii) बाघ जंगल छोड़कर गाँव में क्यों आ जाता था ?(iv) मैंने अहाते में क्या देखा ?(v) मुझे देखते ही साँप कहाँ छिप गया था ?(vi) गुरुजी कहाँ जा रहे थे ?(vii) गुरुजी को बाज़ार जाते हुए कौन मिले ?(viii) गाँव में रंगाई की दुकान किसने खोली ?(ix) अवंती को परेशान करने के लिए सेठ ने क्या किया ?(x) गुरुजी थैली में क्या लिए जा रहे थे ?											
प्र.10	मित्र को गरमी की छुट्टियाँ अपने साथ बिताने के लिए निमंत्रण पत्र लिखिए ।											



Ekayanaa School, Indore

Class & Sec.: III

Subject: Math

Date:

Name _____

Teacher's Sign: _____

Ch: 14 Rupee and Paise

Q1. Write in long form:

- a. ₹ 45 _____
- b. ₹ 45.50 _____

Q2. Write in short form:

- a. fourteen rupee sixty five paise _____
- b. sixty rupees thirty paise _____

Q3. Add the following:

a. ₹ 45.56 + ₹ 54.64	b. ₹ 46.78 + ₹ 78.10

Q4. Fill in the blanks:

- a. _____ is the medium of exchange.
- b. ₹ 1 = _____ p

Q5. Subtract the following:

a. ₹ 45.50 + ₹ 4.14	b. ₹ 42.79 + ₹ 12.10

Q6. Complete the following bill:

S.No	Particulars	Quantity	Rate	Amount
1	Note books	15	20	
2	Chart paper	30	5	
3	Pen	12	3	
4	Pencil box	10	52	
TOTAL				

Q7. Multiply the following:

- a. ₹ 32 by 5
- b. ₹ 23 by 6
- c. ₹ 150 by 4



Ekayanaa School, Indore

Class& Sec.: III

Subject: Math

Date:

Name _____

Teacher's Sign: _____

Ch: 14 Rupee and Paise

Q1. Write in long form:

- a. ₹ 45 _____
b. ₹ 45.50 _____

Q2. Write in short form:

- a. fourteen rupee sixty five paise _____
b. sixty rupees thirty paise _____

Q3. Add the following:

a. ₹ 45.56 + ₹ 54. 64	b. ₹ 46.78 + ₹ 78.10

Q4. Fill in the blanks:

- a. _____ is the medium of exchange.
b. ₹1=_____p

Q5. Subtract the following:

a. ₹ 45.50 – ₹ 4. 14	b. ₹ 42.79 – ₹ 12.10

Q6. Complete the following bill:

S.No	Particulars	Quantity	Rate	Amount
1	Note books	15	20	
2	Chart paper	30	5	
3	Pen	12	3	
4	Pencil box	10	52	
TOTAL				

Q7. Multiply the following;

- a. ₹ 32 by 5
b. ₹ 23 by 6
c. ₹150 by 4

Ch: 8 Who is Heavier?

Ch: 11 Jugs and Mugs

Q1. Convert into grams:

- a. 4 kg b. 56 kg c. 12 kg

Q2. Convert into kilograms:

- a. 3000 g b. 15000 g c. 10000 g

Q3. Convert into litre (l).

- a. 6000 ml b. 12000 ml c. 30000ml

Q4. Convert into millilitre (ml):

- a. 7 l b. 16 l c. 20 l

Q5. Add the following:

- a. 4 kg 250g + 5 kg 350 g
b. 14 kg 650 g + 23 kg 275g
c. 4 l 675 ml + 5 l 123 ml
d. 23 l 345 ml + 20 l 360 ml

Q6. Subtract the following:

- a. 32 kg 450 g – 23 kg 230 g
b. 28 kg 750 g – 12 kg 350 g
c. 68 l 274 ml – 32 l 190 ml
d. 12 l 234 ml – 9 l 130 ml

Q7. Word problems:

- a. Neha sold 7 l 264 ml of juice in week 1 and 3 l 364 ml of juice in week 2. How much juice did she sell in all?
- b. A swimming pool holds 68 l 345 ml of water. If 42 l 234 ml of water is drained out, how much water is left in the pool?
- c. Mummy buys 2 kg 450 g of grapes and 4 kg 650 g of apples. How much do the fruits mummy buy weigh altogether?
- d. If the packet of chips weighed 23 kg 450 g and you ate 13 kg 650 g of chips with your friends. How much chips are left in the packet?



Ekayanaa School, Indore

Class & Sec.: III

Subject: Math

Date:

Name _____

Teacher's Sign: _____

Ch: 8 Who is Heavier?

Ch: 11 Jugs and Mugs

Q1. Convert into grams:

- a. 4 kg b. 56 kg c. 12 kg

Q2. Convert into kilograms:

- a. 3000 g b. 15000 g c. 10000 g

Q3. -Convert into litre (l).

- a. 6000 ml b. 12000 ml c. 30000ml

Q4. Convert into millilitre (ml):

- a. 7 l b. 16 l c. 20 l

Q5. Add the following:

- a. 4 kg 250g + 5 kg 350 g
b. 14 kg 650 g + 23 kg 275g
c. 4 l 675 ml + 5 l 123 ml
d. 23 l 345 ml + 20 l 360 ml

Q6. Subtract the following:

- a. 32 kg 450 g – 23 kg 230 g
b. 28 kg 750 g – 12 kg 350 g
c. 68 l 274 ml – 32 l 190 ml
d. 12 l 234 ml - 9 l 130 ml

Q7. Word problems:

- a. Neha sold 7 l 264 ml of juice in week 1 and 3 l 364 ml of juice in week 2. How much juice did she sell in all?
- b. A swimming pool holds 68 l 345 ml of water. If 42 l 234 ml of water is drained out, how much water is left in the pool?
- c. Mummy buys 2 kg 450 g of grapes and 4 kg 650 g of apples. How much do the fruits mummy buy weigh altogether?
- d. If the packet of chips weighed 23 kg 450 g and you ate 13 kg 650 g of chips with your friends. How much chips are left in the packet?

Revision Worksheet

Subject: English

Class & Sec.: III

Name: _____

Q.1 Read the following passage and answer the questions accordingly.

Shaan likes to play in the rain. When it rains he puts on his raincoat and boots. He goes outside. He splashes in the puddles but he must think that he is a duck. Sometimes Mahak plays in the rain with Shaan.

- i. When does Shaan likes to play?
- ii. What does Shaan put on when it rains?
- iii. What does Shaan splash in ?
- iv. Who plays in the rain with Shaan sometimes?
- v. Give suitable title to the passage.

Q.2 Answer the following questions

- i. Where were the people going?
- ii. What does baby do with the pebbles?
- iii. What do they say?
- iv. Why do you think Meena was carrying her brother?
- v. What does camel eat in the desert and for how many weeks it can store food?

Q.3 Write the correct form of verb in Simple Present tense.

- a. I _____ to school. (walk /walk's)
- b. They often _____their grandparents at weekends.
(visit/visits)
- c. Bob always _____milk in the morning. (drink/drinks)

Q.4 Fill the appropriate Simple Past form of the verb given.

- a. When I _____(be) in Japan I _____(find) everything very different.
- b. Two years ago my parents _____(buy) a new car.
- c. My brother and I _____(play) tennis yesterday.
- d. They _____(walk) to school today.

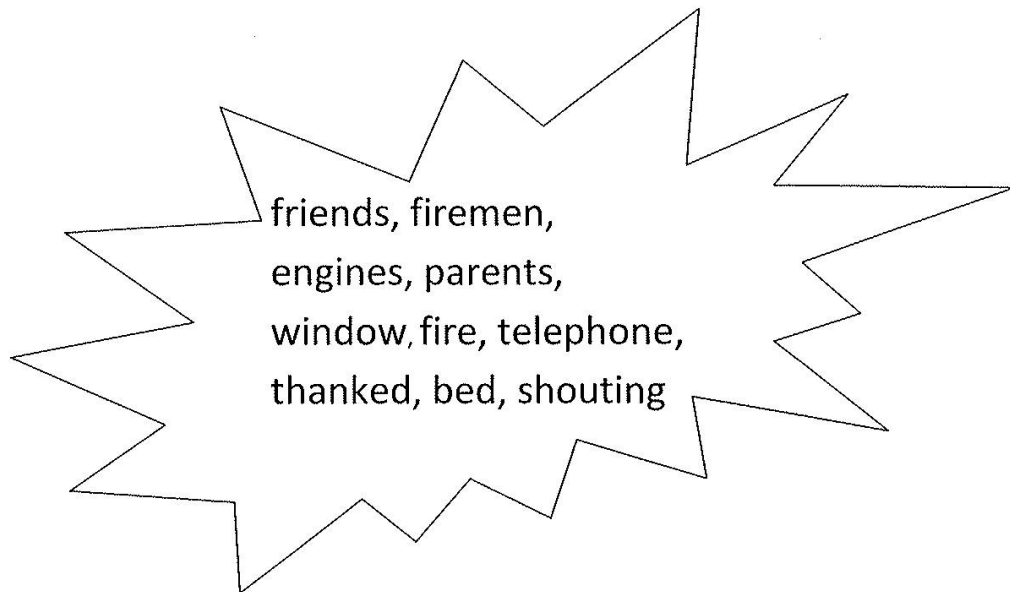
Q.5 Put the verbs in bracket into Present Continuous tense.

- a. Mr. White _____(work) for a multinational company. He _____(not work) today, however , because he _____(not feel)well.

Q.6 Put correct form of Future tense in the blank.

- a. John is very happy today. I _____(try) to talk to him.
- b. I think she _____(pass) tomorrow's exam.
- c. In half an hour everybody _____(watch) the film.


Q.7 Complete the short story using the words given in the help box:



It was midnight. Everyone in the family was in their _____.
Only Rajbir was awake. He was studying for a test. Suddenly, Rajbir heard somebody _____ for help. He looked out of his bedroom _____ and saw a house on _____.
People were running and shouting. Quickly, he picked up the _____ and called the fire brigade. In a few minutes two fire _____ arrived . The _____ put out the fire. No one was hurt.

Rajbir's neighbours _____ him and praised him. Rajbir's _____ also hugged him and were very proud of him for calling the fire brigade. His school _____ also praised him.

Q.8 Describe the picture given below:



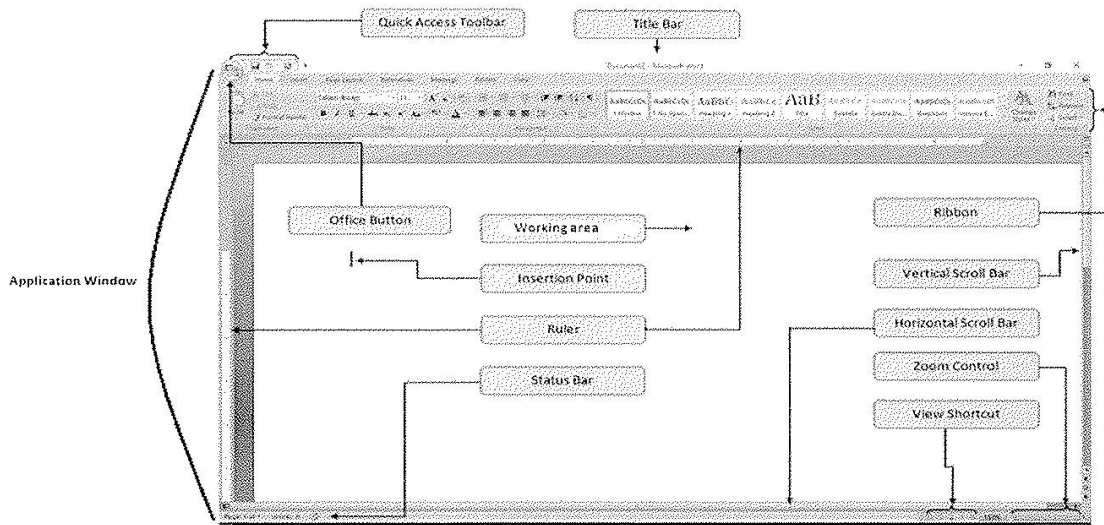
Q.9 Underline the correct word to complete the sentences.

- a. We need three cups of flour/ flower and one cup of sugar for the pudding.
- b. The son/sun is shining brightly in the sky.
- c. Have you been / bean to the new mall?
- d. I ate /eight idli for breakfast today.
- e. Hurray! Our team one/won the match.

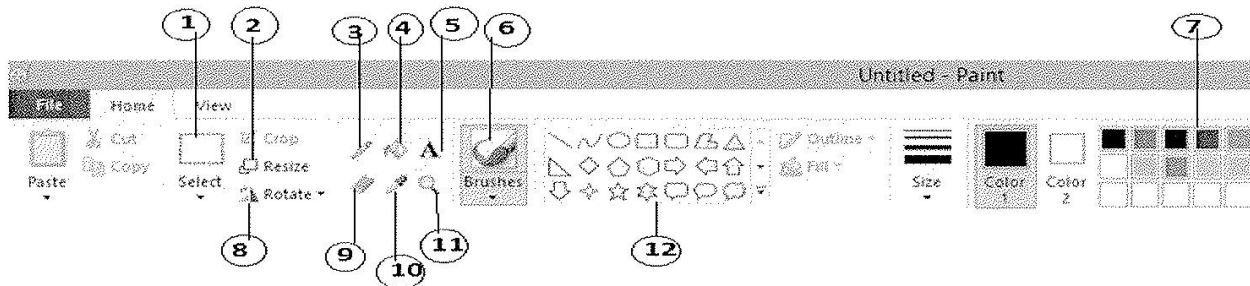
Q.10 Rearrange these letters to form anagrams. Use the meanings as clues..

- a. read _____ someone who is close to us
- b. save _____ we keep flowers in this
- c. inch _____ the part of the face below the mouth
- d. study _____ a place that has a lot of dust
- e. stew _____ the direction in which the sun sets

Components of MS Word Window

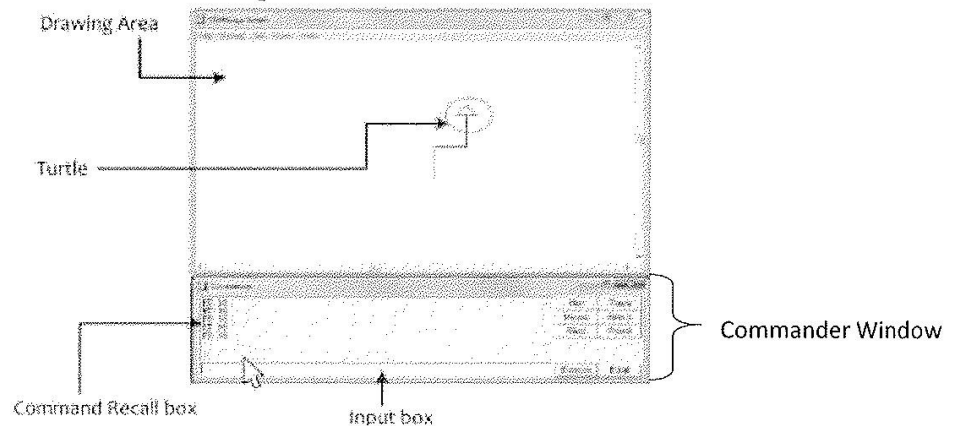


Components of MS Paint Window



- | | |
|--------------------|------------------|
| 1. Select Tool | 7. Colors |
| 2. Resize | 8. Rotate |
| 3. Pencil | 9. Eraser |
| 4. Fill with color | 10. Color Picker |
| 5. Text | 11. Magnifier |
| 6. Brushes | 12. Shapes |

Components of LOGO Screen



Name _____ Date: _____ Teacher's Sign. 

Revision Worksheet

Write the LOGO commands/primitives for the following:


[Hint :- CS , CT, HT, RT, FD , PU, PD, LT, BYE, PE, Clean, ST, Home, CS, CS CT]

1. To move the turtle forward : _____
2. To move the turtle backward : _____
3. To turn the turtle towards right side. : _____
4. To turn the turtle towards left side. : _____
5. To hide the turtle from the screen : _____
6. To show the turtle back on the screen: _____
7. To exit logo : _____
8. To bring the turtle to the centre of the screen : _____
9. To clear the complete picture drawn on the main screen : _____
10. To clear the text from commander window : _____
11. To clear the commands in the input box and drawing on the main screen : _____
12. To lift up the pen from the screen. : _____
13. To put the pen down : _____
14. To erase a line while moving the turtle: _____
15. To clear the entire drawing and leaves the turtle to its last position. : _____

Q2. Write the Logo Command to draw the following figures:





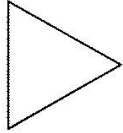


Name _____

Date: _____

Q1. Write the Logo Command to draw the following figure(Using Repeat)

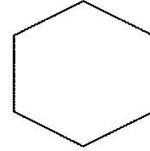
1)



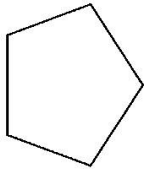
2)



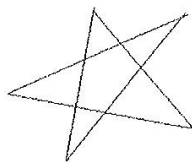
3)



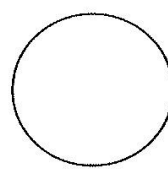
4)



5)



6)




Q2. Write the Logo commands to get the following figures.

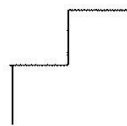
1)



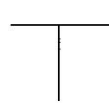
2)



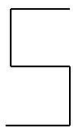
3)



4)



5)




6)



7)



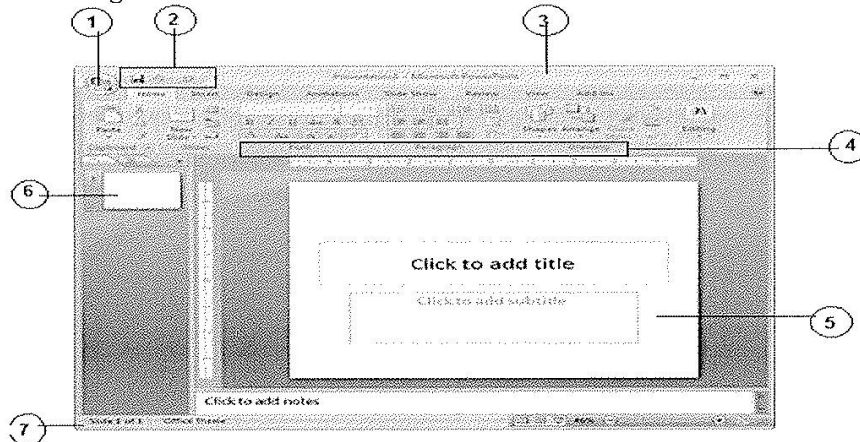
8)



Name _____

Date: _____

Q1. Label the following:

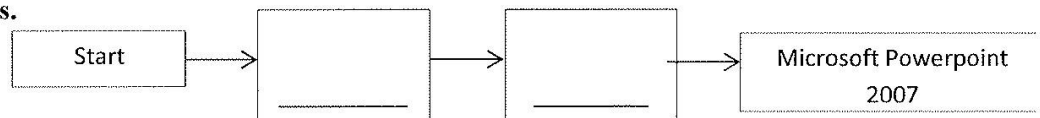


Q2. Multiple Choice Questions:

- MS Powerpoint is developed by _____.
a) Google b) Microsoft c) Yahoo
- The shortcut key to create a new presentation is _____.
a) Ctrl+O b) Ctrl+N c) Ctrl+M
- The shortcut key to open an existing presentation is _____.
a) Ctrl+ O b) Ctrl+P c)Ctrl+M
- _____ are the dotted or hatch marked borders that are part of most slide layouts.
a) Slides b) Placeholders c) Ribbon
- We can press _____ to view the slide show.
a)F3 b) F4 c) F5
- _____ is the short cut key to insert a new slide.
a) Ctrl+N b) Ctrl+M c) Ctrl+K
- MS Powerpoint 2007 saves a file with extension _____.
a) .pptx b).ptx c).docx
- _____ tab contains new slide button.
a)Insert b)Home c)Design
- _____ is a presentation software program.
a) MS Word b) Logo c)MS Powerpoint
- _____ is a page in a Powerpoint presentation.
a) Slide b)Ribbon c)Group

Q3. Fill in the blanks.

To start Powerpoint,



Q4. The teacher has asked Priya to make a presentation on 'Save Water'. She has made first slide and is unable to insert a new slide. Help her to insert a new slide.

Q5. Priya wants to save her presentation. Suggest a method to save her presentation.

Name _____

Date: _____

Q1. Multiple Choice Questions:

1. _____ is regarded as founder of World Wide Web.
a) Bill Gates b) Tim Berners Lee c) Sabeer Bhatia
2. _____ is a special program to open websites.
a) Web browser b) Powerpoint c) Logo
3. _____ is a search engine.
a) Google b) Gmail c) Airtel
4. _____ are the digital pages on the Internet which contains information.
a) Search engine b) Webpages c) WWW
5. _____ is a collection of webpages.
a) WebPage b) Home page c) Website
6. _____ is an example of a Web browser.
a) Yahoo b) Bing c) Google Chrome
7. First page of a website is called _____.
a) Homepage b) Website c) Webbrowser
8. _____ is an example of ISP.
a) BSNL b) Facebook c) Whatsapp

Q2. Expand the following:

1. URL : _____.
2. WWW : _____.
3. ISP : _____.
4. Internet : _____.
5. E-Mail : _____.

Q3. State True or False.

1. Website is a special program to access information.
2. An email is sent by post.
3. An ISP is a company that give access to internet.
4. Yahoo is a search engine.
5. Internet helps us to buy movie tickets.

Q5. Unscramble the words to find answers for the following:

1. The first page of a website. (ehmo gpea) : _____
2. Internet Explorere is a type of (ebW rwBores) : _____
3. One basic requirements for an Internet Connection(Mdeom) : _____
4. An example of ISP (lirAet) : _____

Q4. Suman wants to search some information on 'Healthy Eating'. Help her to get the information from Internet.

Answers

Q1. Multiple Choice Questions:

1. Tim Berners Lee
2. Web browser
3. Google
4. Webpages
5. Website
6. Google Chrome
7. Homepage
8. BSNL

Q2. Expand the following:

1. Uniform Resource Locator
2. World Wide Web
3. Internet Service Provider
4. International Network
5. Electronic Mail

Q3. State True or False.

1. False
2. False
3. True
4. True
5. True

Q5. Unscramble the words to find answers for the following:

1. Home page
2. Web Browser
3. Modem
4. Airtel

Q4. Open any Browser(Google Chrome)



Type www.google.com and press Enter key



Type 'Healthy Eating' and Press Enter key



Revision Worksheet

Subject: EVS

Name: _____

Class: III _____

Date: _____

Q1. Choose the correct option:

1. Voyage or ship taken as a holiday
a) Puddle b) cruise c) meadows
2. A book of maps is called
a) atlas b) cartographer c) compass
3. The bird kite has which type of foot.
a) wading foot b) climbing foot c) grasping foot
4. A _____ weaves web on the wall.
a) frog b) spider c) owl
5. The _____ makes a braying sound.
a) donkey b) crow c) frog
6. Which of the following expresses Aftaab's feeling?



Q2. Fill in the blanks:

1. Kangaroos are found in _____.
2. Animals that feed on dead animals are called _____.
3. _____ feathers are long and found on wings.
4. A sweet fluid produced by flower is called _____.
5. _____ uses its beak as needle to make nest

6. _____ is used in maps to represent real objects.
7. We use _____ to hear.
8. The _____ moves its neck back and forth with a jerk.
9. _____ is the tallest animal in the world.
10. An eagle has _____ tail.


Q3. Answer in one word:

1. Name the bird with red colour beak.
2. How do people who cannot speak exchange their thoughts?
3. What is study of birds called?
4. The people who draw maps are called.
5. Name a vehicle that runs on electricity.

Q4. Observe the pictures and answer:


1. a) Name the animal.

b) How is it useful to us?




2. a) Name it.

b) Which type of transport is it?



3. a) Who developed this script?


b) This script is useful for whom.



Braille Script


4. a) Name the animal.

b) Why they are found in water during summers?



5. a) Name the bird.

b) How it is different from other birds?



6. a) Name the bird.

b) What type of beak does the bird have?



Q5. Answer the following:

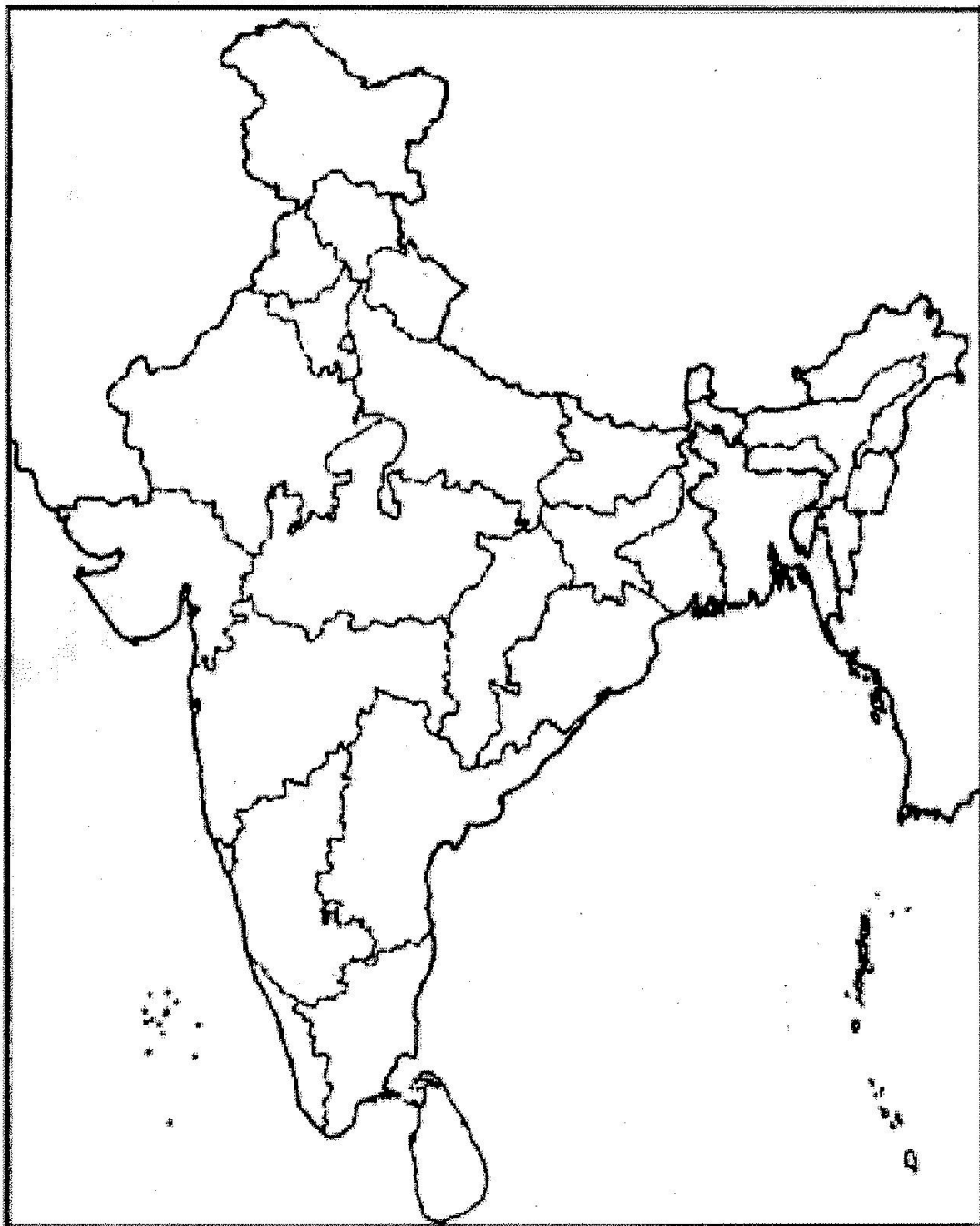
1. Name two animals that crawl.
2. Name two scavengers.
3. Name two birds that produce musical sound.
4. Name two air transport.
5. Name two birds having perching foot.
6. Name two emergency transport services.
7. Name two pests.
8. Name two aquatic animals.
9. Name two sense organs.
10. Name two types of feathers.

Q6. Define the following:

- | | | |
|----------------|---------------|--------------|
| 1. Carnivores | 2. Herbivores | 3. Omnivores |
| 4. Mudras | 5. Meadows | 6. Perching |
| 7. Feathers | 8. Pets | 9. Pests |
| 10. Scavengers | 11. Landmark | 12. Script |

Q7. Name them and mark the following on map.

1. Three international airports in India.
2. Largest bird sanctuary in India.
3. Biggest national park in India.



Revision Worksheet

Subject: EVS

Name: _____

Class: III _____

Date : _____

Q1. Give reasons for the following:

1. We feed animals
2. Animals move from one place to another
3. The owl in the jungle could not sleep during the day
4. Symbols used in maps
5. Sense organs are important

Q2. What does the following stand for:

1.



2.



3.



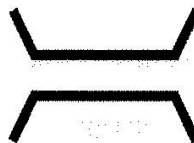
4.



5.



6.



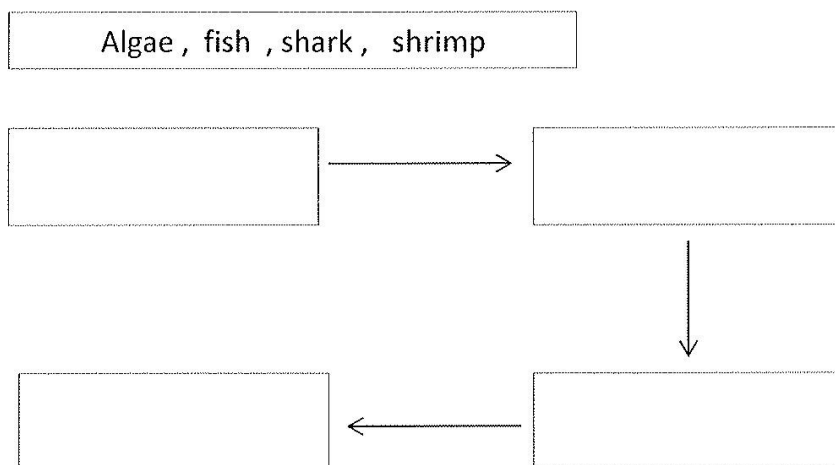
7.



8.



Q3. Complete the food chain using the following:



Q4. Answer the following questions:

1. What are different modes of movement in animals?
2. Why was Shankar happy?
3. How do we take care of our pets?
4. What can we do to keep our houses free from pests?
5. Write some special features that help birds to fly.
6. How are beaks useful to birds?
7. On what factors does means of transport that we use depends on?
8. How does Braille script help people who can't see?
9. What is a map?
10. What is Braille?

Q5. Classify the following animals as herbivores, carnivores and omnivores:

Cow, Lion, Crow, Dog, Dear, Goat, Bear, Zebra, Tiger, Wolves