

Subject:English

Class&Sec.:II

Date:_____

Name:_____

Section A-Spellings-Prepare all new words of poem and lesson of Unit6, 7 and 8 of Marigold from Notebook for Dictation.

SectionB-CreativeWriting-Q.1 Picture composition, Q.2 Writing a paragraph on any one topic : Zoo, My grandmother, My Family, A picnic (Prepare 5-6 sentences) and Q.3 Fill in the blanks and complete the letter given. ***(Practice sheets are already given)**

Section-C –Grammar

Q.1 Join the sentences using and/but/or;

A) She is good at dance. She is good at music.

Ans. _____

B) She can dance well. She cannot run fast.

Ans. _____

C) Will you take a red ball? Will you take a blue ball?

Ans. _____

Q.2 Complete the story by choosing and filling up with the correct words:

My cousins _____ are Rohan, Aarav, Jiya and Priya. _____ (You/We) meet every Sunday and play together. Rohan plays football nicely. _____ (He/She) always wins the match. He _____ (has/have) a very nice football. Jiya and Priya _____ (is/are) good at singing. _____ (they/them) sing lovely songs on Sunday. They always _____ (does/do) their homework first then come to meet us. I also _____ (do/does) my all homework then go to play. Last Sunday, Aarav and Jiya _____ (have/had) a party in their house so they _____ (donot/didnot) come. Yesterday it _____ (is/was) Sunday and we all _____ (had/have) fun. Today we _____ (has/have) a lot of work to do and we will do our work.

Q.3 Choose and fill the correct position words in the blanks:

i) The fruits are _____ the basket. (above/in)

ii) The boy is jumping _____ the hurdle.(over/ on)

iii) We keep night lamp _____ the bed.(near/on)

iv) There is a garden _____ our house.(under/in front of)

- v) There is a soft board _____ the teacher's table in our class.(under/above)
- vi) Shoes are kept _____ the sofa.(above/under)
- vii) There is a big playground _____ our house.(behind/in)
- viii) The duck is jumping _____ the pond.(into/in)
- ix) Riya is climbing _____ the hill very fast. (down /up)
- x) The dinner plates are placed _____ the dining table.(on/ above)

Q.4 (i) Tick the correct words in the brackets:

- (what ,when)do you get up in the morning?
- (who, which)is standing at the door?
- (where, what)is your sports bag?
- (what, why)is in your pocket?
- (why, which)dress do you like?

Q.4 (ii) Make a question using Who / Which / What / When / Where for the given answer: (one has been done for you)

Q. Who is your best friend?

Ans. My best friend is Meeta.

Q. _____

Ans. I go to the park in the evening.

Q. _____

Ans. Our family is going to London.

Q. _____

Ans. The red umbrella with stripes is mine.

Q. _____

Ans. My friends gave me a toy car on my birthday.

Q.4(iii) Look at the picture and answer using helping verbs:



Q. Is this a lion?

Ans. _____



Q. Are the birds flying?

Ans. _____



Q. Are the students studying?

Ans. _____

Q.4 (iv) Make questions for the given answers using helping verbs.(Two have been done for you)

Q. Do they have a card?

Ans. Yes, they have.

Q. _____

Ans. Yes, these are balloons.

Q. _____

Ans. No, she did not give me a pencil.

Q. Did she give you a ball?

Ans. No, she did not give me.

Q. _____

Ans. No, he does not return.

Q. _____

Ans. Yes, they are going.

Section D- Vocabulary

Q5. Change these words in singular or plural:

_____ - benches

tomato- _____

_____ - flies

wolf - _____

deer- _____

_____ - teeth

_____ - mice

ox- _____

brush- _____

_____ - children

woman- _____

lady - _____

_____ - glasses

goose- _____

_____ - children

Q6. Add the word of the opposite gender in the given sentences:

- i) Amar's **mother** and _____ went to the park.
- ii) I have a **brother** but no _____.
- iii) I saw a **princess** and a _____.
- iv) The **doe** is sitting but the _____ is standing.
- v) The **emperor** and the _____ are sitting on the throne.
- vi) I saw a **fox** and a _____ in the cage.
- vii) The **cow** is eating grass but the _____ is not.
- viii) The **cat** is drinking milk but _____ is not.
- ix) **Witch** and _____ are there on the wall.
- x) The **pig** and _____ are in the sty.
- xi) The **bride** and _____ are greeting guests on the stage.
- xii) The **nun** is the garden while the _____ is in the temple.

Q7. Write 2 rhyming words for each:

house- _____, _____ sec- _____, _____ mischief- _____, _____

wide- _____ tall- _____ white- _____

knees- _____ care- _____ wall- _____

Q.8. Make a word starting with the given letters:

ch- _____ fr- _____ bl- _____

wh- _____ st- _____ l- _____

n- _____ gr- _____ p- _____

Q.9 Make sentences using the following words:

- 1) cottage- _____
- 2) bowl- _____
- 3) hungry- _____
- 4) chimney- _____
- 5) helpful- _____
- 6) wide- _____
- 7) gates- _____
- 8) delicious- _____
- 9) musician- _____
- 10) sack - _____
- 11) forgive- _____
- 12) kind- _____

Q.10 Write the meaning/word in the blanks:

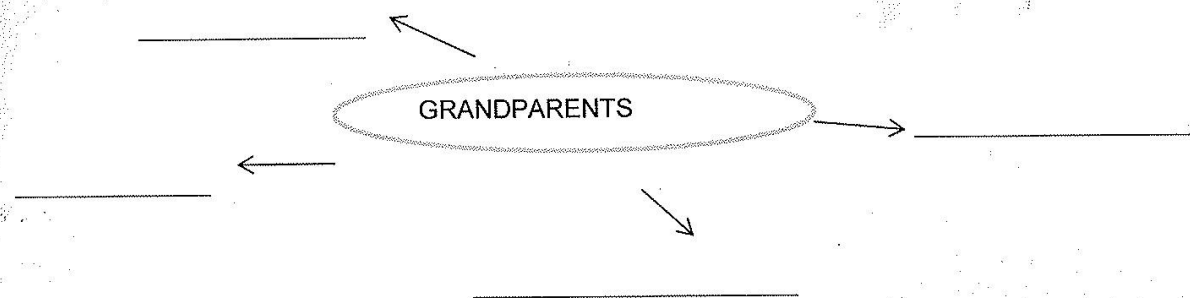
- 1) _____ -fear
- 2) tired- _____
- 3) _____ - a large bag made of thick cloth to carry goods
- 4) erase- _____
- 5) _____ - a command or instruction
- 6) _____ - a tube to let the smoke go out
- 7) hungry- _____
- 8) _____ - rough and unfriendly
- 9) _____ -cereals boiled in water
- 10) _____ -arranged in curls or rolls

11) quiet- _____

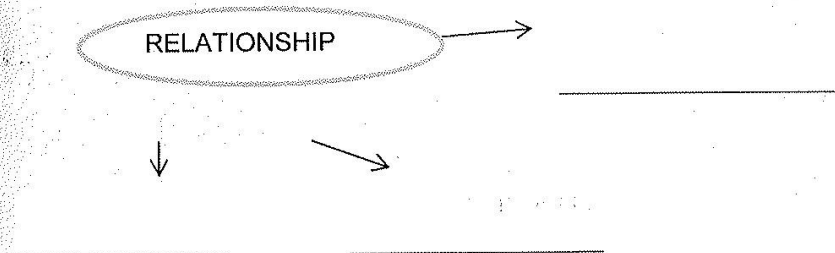
12) wide- _____

Q.11 Make new words(4-8 letter words) using the letters given in this words:

i)



ii)



Q.11 Answer the following questions :

(*Learn all question–answers from notebook by writing in revision notebook)

Q.12 Comprehension- Read the poem and answer the questions given below:

(*Practice sheets are already given, practice them)



Ekayanaa
SCHOOL

Think. Learn. Excel.

CLASS - II

WOW Grammar topics for Evaluation-2

Lesson-7,8,9,12,13,14,15,19,20,21,22, 24, 25 and L-23(genders only page no.95, 96 and 97)

Read only topics:

Ls-16, 17, 18

Remaining book exercises (Please check)

Ls- 21, 22 and 25 letter writing (page no. 104, 105)

Activities and projects

English: Write the recipe of porridge stepwise with the names of things we need. Draw /paste pictures also.

Mathematics: 1. Mention the official currency of the following countries and draw their symbols also.(Do not paste any original specimen note) – U.S.A., Europe, Japan, U.K., China

Eg. – India – rupees- (And make symbol of rupees)

2. Paste two pictures each of the following:

Objects to be measured in –

- 1) Metre(m.)
- 2) Centimetre(cm.)
- 3) Litre(l.)
- 4) Millilitre(ml.)
- 5) Kilogram(kg.)

And paste/draw some instruments of measurements.

* Do all these activities in scrapbook

*Submit when the school reopens-

हिंदी -लिंग एवं विलोम शब्द बलकर उनसे वाक्य बनायें

एवं चित्र चिपकायें।(Do this in the given worksheet and

paste the pictures along with the sheet in the scrap book)

CLASS - II

Subject: MATH

Book Name: MATH MAGIC

Topic : My Funday (Chapter 9)-From page No.66 to 75

Monday is the first day of the week.

(Answer the following questions)

1. The third day of the week is - Wednesday
2. The last day of the week is - Sunday
3. The fourth day of the week is – Thursday
4. Which day comes after Thursday – Friday
5. Which day comes before Sunday – Saturday
6. 2 days after Thursday – Sunday
7. 5 days after Thursday - Wednesday

Today is **Wednesday**.

1. What is the day today? Wednesday.
2. What day will be tomorrow? Thursday
3. What day was it yesterday? Tuesday
4. What day will it be day after tomorrow – Friday
5. What day was it the day before yesterday? Monday

*PRACTICE THE EXERCISES ON PAGE NO.66 TO 69


1. First month of the year – January
2. Which month comes after July – August
3. Which month comes before November – October
4. Name the months having 31 days – January, March, May, July, August, October, December.
5. How many days are there in June and July together? (June)30+(July)31= 61 days

*PRACTICE THE EXERCISES ON PAGE NO.72 AND 73


Chapter - 15 How Many Ponytails? (Data Handling)

Practice the book exercises from Page No-124 to 128 - (Copy work completed with worksheets)

Saving the Drawing:

Click on Save tool  from the toolbar to save the drawing.

Closing the Tux Paint:


Click on the Quit tool .

A box will appear.

Click on Yes button ☒ if you want to close.


Click again on Yes button ☒ if you want to save the file before closing.

Opening the Drawing:

Click on Open tool .


Select the drawing that you want to open.

Opening the Drawing



BRAIN DEVELOPER

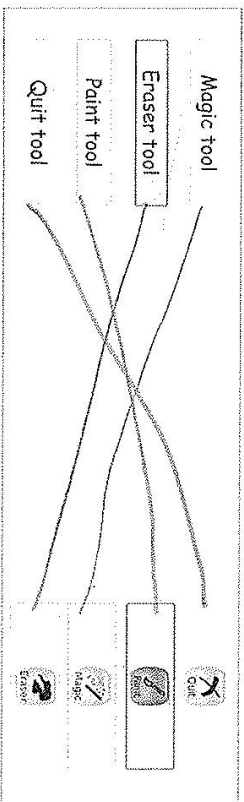
A] Label the different parts of Tux Paint window:



64

IT apps@kios

B] Match the following:



C] Answer in one word:


- Which tool in the Tux Paint is similar to the Brush tool of MS Paint? Paint Tool
- Name the tool that is used to erase the drawing. Eraser Tool
- Which button is used to start a new drawing? Open Tool



Lab Activity

Draw a beautiful scenery as shown here:

- Open Tux Paint.
- Click on New tool and select white canvas.
- Select Point tool and draw mountains, river, birds, duck, boat, man, flowers, stem and leaves.
- Select Fill magic effect from the Magic tool and fill different colours in the drawing by selecting colours from the Color box.
- Save the drawing.



68

IT apps@kios

विषय :- हिन्दी

कक्षा एवं अनुभाग : दूसरी

दिनांक :

नाम :


निरीक्षक :

क्रमांक	प्रश्न
	(शब्द ज्ञान)
प्र.1	१० शब्दों का श्रुतलेख लिया जायेगा।
प्र.2	(रचनात्मक लेखन) किसी एक पर पाँच वाक्य लिखिए :- (i) राष्ट्रीय पशु (ii) हमारा विद्यालय (iii) फलों का राजा " आम "
	(व्याकरण ज्ञान)
प्र.3	दिनों के नाम लिखिए -
प्र.4	महीनों के नाम लिखिए -
प्र.5	एक से बीस तक की गिनती शब्दों व अंको में लिखिए -
प्र.6	रिक्त स्थान भरों :- (i) एक - दूसरे का उल्टा अर्थ देने वाले शब्द _____ कहलाते हैं। (ii) लिंग _____ प्रकार के होते हैं - _____ व _____ (iii) _____ के करने या होने को क्रिया कहते हैं। (iv) वे शब्द जिनका अर्थ एक जैसा होता है वे _____ शब्द कहलाते हैं। (v) साल में _____ महीने होते हैं। (vi) संज्ञा शब्दों की विशेषता बतानेवाले शब्द _____ कहलाते हैं।-

क्रमांक	प्रश्न
प्र.7	संज्ञा के साथ एक विशेषण लिखिए - (i) टमाटर (ii) तारे (iii) चाय (iv) चावल (v) लड़का (vi) गाजर
प्र.8	समानार्थी शब्द लिखो : - (i) बालक - _____ (ii) मोर - _____ (iii) बंदर - _____ (iv) आसमान - _____ (v) हाथ - _____
प्र.9	विलोम शब्द लिखिए : - (i) कम - _____ (ii) दूर - _____ (iii) इधर - _____ (iv) हँसना - _____ (v) ऊँचा - _____ (vi) दिन - _____ (vii) सुबह - _____ (viii) अंदर - _____ (ix) झूठ - _____ (x) कच्चा - _____ (xi) असली - _____ (xii) सदी - _____
	(पाठ्य पुस्तक)
प्र.10	निम्नलिखित प्रश्नों के उत्तर दो - (i) क्या आपने भी बहुत सारी किताबें देखी हैं ? कहाँ ? (ii) तितली कली के पास क्यों गई थी ? (iii) चूहा अपनी टोपी में सितारें क्यों लगवाना चाहता था ? (iv) बुलबुल को पहचानने का सरल तरीका क्या है ? (v) सारंगी वाले ने सारंगी पर खोल क्यों चढ़ाया होगा ? (vi) छोटे बाघ का ध्यान केवल उन्हीं दो छोटी लड़कियों पर ही क्यों गया ? (vii) दर्जी चूहे की किस बात से डर गया ? (viii) मौसी ने वीरु को फुट्टा लाने के लिए क्यों कहा ?

क्रमांक	प्रश्न	
प्र.11	शब्दार्थ लिखिए - (i) ठिठक (iii) डाल (v) खोल (vii) महक (ii) सिरा (iv) हमला (vi) सुझाव (viii) झुंझलाया	
प्र.12	समान तुक वाले शब्द लिखिए - (i) डाल (iii) माल (v) पीछे (ii) हरी (iv) चहक (vi) छोटा	
प्र.13	(अपठित गद्यांश) दी गई अभ्यास पत्रिका के आधार पर अपठित गद्यांश का अभ्यास करें । (सुलेख)	

नाम

अध्यापिका के हस्ताक्षर 

पाठ १३ सूरज जल्दी आना जी

शब्दार्थ :-

कुहासा - कोहरा या धुँध

समान तुक वाले शब्द :-

गोरी - कटोरी

लाना -आना / बहाना

दिखता - टिकता

भीगे - गीले /सीले

प्रश्न - १ कविता में धूप का रंग गोरा बताया गया है ,तुम्हें धूप का रंग कैसा लगता है ?
उ. हमें धूप का रंग सुनहरा लगता है ।

प्रश्न - २ कौन से मौसम में धूप बिलकुल नहीं सुहाती है ?
उ. गर्मी के मौसम में धूप बिलकुल नहीं सुहाती है ।

पाठ १४ नटखट चूहा

नवीन शब्द :-

झूमता , दुकानदार ,नज़र ,गुस्सा ,बर्बाद ,कुतरूँगा, रेशमी ,उछलता- कूदता , कृपया ,दर्जी, आईने,
रुपहले ,खरीदना ,बिखेरुगाँ , टाँक , हैरान, गद्दी , सिंहासन , कारण

शब्दार्थ :-

शरारत -मस्ती , बर्बाद- नष्ट ,रुपहले - चमकदार

झटपट -तुरंत , , सिंहासन- राजगद्दी , चालाक- चतुर

प्रश्न - १ दर्जी चूहे की किस बात से डर गया ?-

उ. चूहे ने दर्जी से कहा कि वह रात को अपनी सेना लेकर आएगा यह सुनकर दर्जी डर गया ।

प्रश्न - २ चूहा टोपी पर सितारे क्यों लगवाना चाहता था ?

उ. चूहे की टोपी सादी लग रही थी, उसे सुंदर बनाने के लिए चूहा उसमें सितारे लगवाना चाहता था ।


प्रश्न - ३ कपड़े वाले ने, दर्जी ने, व सितारें वाले ने शुरू में चूहे की बात पर ध्यान क्यों नहीं दिया ?

उ. इन सभी ने चूहे की बात पर यही सोचकर ध्यान नहीं दिया कि एक छोटा सा चूहा वह सबका क्या बिगाड़ लेगा ।

रचनात्मक अभ्यास



चित्र देखकर उसके बारे में पूछे गए प्रश्नों के उत्तर दीजिए—
हाथी



1. हाथी कैसा जानवर है?

हाथी एक बड़ा और शाकाहारी जानवर है।

2. हाथी का रंग कैसा होता है?

हाथी का रंग हल्का स्लेटी होता है।

3. हाथी के कान कैसे होते हैं?

हाथी के कान बहुत बड़े होते हैं।

4. हाथी क्या खाता है?

हाथी अन्ना, फल और पेड़ की पत्तियाँ खाता है।

5. हाथी के शरीर में ऐसा कौन-सा अंग है, जो और जानवरों में नहीं होता?

हाथी के पास एक लंबी सूंड होती है।

कहानी - १

नीचे दी गई कहानी के रिक्त स्थानों में उचित शब्द लिखिए।

एक लोभी ~~कुत्ता~~ था। एक बार की बात है, उसे बहुत भूख लगी।

~~वह~~ जंगल में इधर-उधर ~~रोटी~~ ढूँढ़ने लगा। लेकिन उसे

~~रोटी~~ कहीं न मिली। ~~वहाँ~~ जंगल में उसे ~~छोटी~~ ~~सी~~

एक ~~सुंदर~~ झोपड़ी दिखाई दी। उस झोपड़ी के पास ही

एक ~~रोटी~~ पड़ी थी। ~~कुत्ते~~ ने मुँह में ~~रोटी~~

दबाई और अपने घर की ओर भागा। नदी पार करते समय, उसने

~~पानी~~ में झाँका। परछाई में उसे दूसरी ~~रोटी~~ दिखाई दी।

~~कुत्ते~~ के मन में लालच आ गया। वह परछाई की ओर झपटा। इस

तरह उसने अपनी ~~रोटी~~ भी गँवाई और लालच की सज़ा भी पाई।

शिक्षा— लालच बुरी बला है।



Date: _____

Name: _____

Ques. No.	Questions																			
Q.1	<p>Fill in the blanks-</p> <p>(i) We get _____ from cotton plant.</p> <p>(ii) _____ fibres are man made.</p> <p>(iii) Hot winds blow in summer are called _____.</p> <p>(iv) Sometimes we see a colourful _____ in the sky on a rainy day.</p> <p>(v) Wild animals mostly live in _____.</p> <p>(vi) A rabbits hole is called a _____.</p> <p>(vii) _____ have neither legs nor wings.</p> <p>(viii) We get _____ and _____ from beehives.</p> <p>(i) Air that moves gently is called _____.</p>																			
Q.2	<p>Match the following and write the number in the bracket given : -</p> <table border="0"> <tbody> <tr> <td>(i) use of wind</td><td>smoke of vehicles</td><td>()</td></tr> <tr> <td>(ii) storing water</td><td>low lands with fertile soil</td><td>()</td></tr> <tr> <td>(iii) dirty air</td><td>flying kites</td><td>()</td></tr> <tr> <td>(iv) valleys</td><td>wool</td><td>()</td></tr> <tr> <td>(v) sheep</td><td>surrounded by water</td><td>()</td></tr> <tr> <td>(vi) island</td><td>matka</td><td>()</td></tr> </tbody> </table>	(i) use of wind	smoke of vehicles	()	(ii) storing water	low lands with fertile soil	()	(iii) dirty air	flying kites	()	(iv) valleys	wool	()	(v) sheep	surrounded by water	()	(vi) island	matka	()	
(i) use of wind	smoke of vehicles	()																		
(ii) storing water	low lands with fertile soil	()																		
(iii) dirty air	flying kites	()																		
(iv) valleys	wool	()																		
(v) sheep	surrounded by water	()																		
(vi) island	matka	()																		
Q.3	<p>Choose the correct answer : -</p> <p>(i) We get (silk / cotton) from silkworm.</p> <p>(ii) (Animals/bees) helps us to grow crops.</p> <p>(iii) (Scavengers / Herbivores) eat flesh of dead animals.</p> <p>(iv) (Kennel / Den) is a man - made shelter.</p> <p>(v) (Weather / season) changes from day to day.</p>																			
Q.4	<p>Name the following : -</p> <p>(i) two land forms. _____</p>																			

	<p>(ii) two synthetic fibres. _____</p> <p>(iii) two natural shelters. _____</p> <p>(iv) two things made of cloth. _____</p> <p>(v) two source of water. _____</p>	
Q.5	<p>Answer in one word :-</p> <p>(i) We feel cold in which season? _____</p> <p>(ii) Sun sets in which direction? _____</p> <p>(iii) We need which gas to breathe? _____</p> <p>(iv) Rope is made up of which material. _____</p> <p>(v) When do we use raincoats? _____</p>	
Q.6	<p>Write T for true and F for false and write the correct word if it is false:-</p> <p>(i) We wear woollen clothes in summer. () _____</p> <p>(ii) Three fourth of the Earth is covered with land. () _____</p> <p>(iii) Flesh eating animals are called omnivores. () _____</p> <p>(iv) A lion home is called a burrow. () _____</p> <p>(v) We wear clothes according to seasons. () _____</p>	6
	<p>Note : - Learn all the Question Answers and practice all flow charts of given chapters : -</p> <p>Lesson - 5</p> <p>Lesson - 15</p> <p>Lesson - 18</p> <p>Lesson - 19</p> <p>Lesson - 20</p> <p>Lesson - 21</p> <p>Lesson - 22</p>	

Subject: Math

Class& Sec.: II

Date: _____

Name: _____

Invigilator's Sign: 

Q.1 Fill in the blanks

1. $1\text{ l} = 500\text{ml} + \underline{\hspace{2cm}}$
 (a) 200ml (b) 500ml (c) 700ml
2. Four 25p coins make ₹ _____
 (a) 5 (b) 1 (c) 10
3. $1\text{m} = \underline{\hspace{2cm}}\text{cm}$
 (a) 100 (b) 1000 (c) 500
4. Two 5 rupee coins make _____.
 (a) ₹ 2 (b) ₹ 10 (c) ₹ 20
5. The month that comes after May is called _____.
 (a) June (b) July (c) April
6. Sixty rupees and thirty five paise can be written as _____.
 (a) ₹ 60.35 (b) ₹ 65.35 (c) ₹ 16.35
7. $55 - 0 = \underline{\hspace{2cm}}$
 (a) 65 (b) 0 (c) 55
8. Eighty nine rupees and seventy paise can be written as _____.
 (a) ₹ 89.70 (b) ₹ 89.75 (c) ₹ 80.75
9. The month that comes before December is _____.
 (a) October (b) January (c) November
10. $30 - 30 = \underline{\hspace{2cm}}$
 (a) 30 (b) 0 (c) 31

Q.2. Match the following

- | | |
|-------------------|--------|
| (1) 9×9 | (a) 0 |
| (2) $64 \div 8$ | (b) 70 |
| (3) $30 \div 5$ | (c) 81 |
| (4) 14×5 | (d) 8 |
| (5) 15×0 | (e) 6 |
| (6) 6×4 | (f) 63 |
| (7) 7×9 | (g) 9 |
| (8) $72 \div 8$ | (h) 24 |






Q.3. Answer the following

- (a) Convert rupees into paise : ₹ 2.50 = _____ p
 (b) ₹ 4.75 = _____ p
 (c) ₹ 8 and 90p = _____ p
 (d) Capacity of painting a can will be measured in _____.
 (e) Length of a ribbon can be measured in _____.
 (f) Third day of the week is Wednesday, so the fifth day of the week is _____.
 (g) We measure distance in _____.

Q.4. Solve the following

- (a)
$$\begin{array}{r} \text{H T O} \\ 136 \\ + 432 \\ \hline \\ \hline \end{array}$$
- (b)
$$\begin{array}{r} \text{T O} \\ 46 \\ + 28 \\ \hline \\ \hline \end{array}$$
- (c)
$$\begin{array}{r} \text{H T O} \\ 546 \\ + 276 \\ \hline \\ \hline \end{array}$$
- (d)
$$\begin{array}{r} \text{T O} \\ 59 \\ - 37 \\ \hline \\ \hline \end{array}$$
- (e)
$$\begin{array}{r} \text{H T O} \\ 420 \\ - 118 \\ \hline \\ \hline \end{array}$$
- (f)
$$\begin{array}{r} \text{H T O} \\ 300 \\ - 143 \\ \hline \\ \hline \end{array}$$
- (g)
$$\begin{array}{r} \text{T O} \\ 23 \\ \times 2 \\ \hline \\ \hline \end{array}$$
- (h)
$$\begin{array}{r} \text{H T O} \\ 123 \\ \times 3 \\ \hline \\ \hline \end{array}$$
- (i)
$$\begin{array}{r} \text{H T O} \\ 410 \\ \times 2 \\ \hline \\ \hline \end{array}$$
- (j)
$$3 \overline{) 36}$$
- (k)
$$2 \overline{) 18}$$
- (l)
$$4 \overline{) 20}$$

Q.5. Select the correct amount matching the price tag

- (a) ☒ ₹ 65 
- (b) ☒ ₹ 100 
- (c) ☒ ₹ 120 
- (d) ☒ ₹ 66 
- (e) ☒ ₹ 51 

Q.6. Which unit you will use for the following measurements. Pick out the correct options from the bracket.

{Centimetre (cm), Grams (g), Millilitres (ml), Metres (m), Kilograms (kg), Litres (l)}

- (a) Length of a tree _____
- (b) Weight of a sack of sugar _____
- (c) Length of a sharpener _____
- (d) Capacity of oil in a drum _____
- (e) Distance between your home and your father's office _____
- (f) Weight of one mango _____
- (g) Capacity of juice in a cup _____
- (h) Length of a window _____

Q.7. Solve the following with proper statements.

- (a) Mona saw 25 flowers in the garden and Rita saw 25 flowers. How many flowers did they see together?

Ans. _____

- (b) Jenny has 500 footballs in his shop.He sold 120 balls in a week.How many balls are remaining with him now?

Ans. _____

- (c) Merry had ₹ 350 .He bought cupcakes for ₹120 .How much money does he have now?

Ans. _____

Q.8. Observe the table and answer the questions below

Games	Number of students
Cadbury	15
5 star	22
Kit kat	10
Perk	15
Munch	16

- (a) Which is the favourite chocolate among the children?

Ans.

- (b) Which is the least favourite chocolate ?

Ans.

- (c) How many children like Munch?

Ans.

- (d) Find the total number of children who like Cadbury and Perk both.

Ans.

- (e) Find out the total number of children.

Ans.

- (f) Which is your favourite chocolate?

Ans.

Q.9. Answer the following





- (a) Write in words : ₹ 45.50 =

- (b) Write in words : ₹ 20.70 =

- (c) Write in numbers : Eight rupees and seventy five paise _____

- (d) Write in numbers: Nineteen rupees and forty paise _____




Q.10. Count and write the total amount of money.

- (a)  +  +  +  = _____

- (b)  +  = _____

- (c)  +  +  +  +  = _____

- (d)  +  = _____

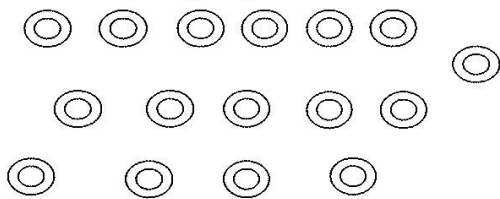
- (e)  +  +  = _____

Q.11. Do as directed

- (a) Divide 12 stars in 2 equal groups.



(b) Make 2 equal groups of 8 balls each



Q.12. Write the repeated subtraction for the following

(a) $12 \div 4$

(b) $25 \div 5$

(c) $35 \div 7$

*

W/1: