

Sample

प्रश्न - १ नीचे दिए गए प्रश्नों के उत्तर लिखिए -

(i) टीटी क्या देखता फिर रहा है ?

उत्तर - _____

(ii) घोड़े को चना खिलाने पर क्या होता ?

उत्तर - _____

(iii) मुर्गी के चूजों का नाम क्या था ?

उत्तर - _____

(iv) ज़मीन पर कौन उछल कूद कर रहा था ?

उत्तर - _____

प्रश्न - २ वाक्य बनाइये -

(i) खेत _____

(ii) ज़मीन _____

(iii) जीभ _____

(iv) दाँत _____

प्रश्न - ३ विलोम शब्द लिखिए -

(i) खरा X _____

(ii) झूठ X _____

(iii) अपना X _____

(iv) लाभ X _____

प्रश्न - ४ पर्यायवाची शब्द लिखिए

- (i) ज़मीन - _____
- (ii) किताब - _____

प्रश्न - ५ रेखांकित शब्दों के लिंग बदलकर वाक्य पूरा कीजिये -

- (i) मोहन अपने माता और _____ को देखकर बहुत खुश हुआ ।
- (ii) नीतू के भाई और _____ पुस्तक पढ़ रहे हैं ।
- (iii) हाथी और _____ दोनों घास खा रहे हैं ।
- (iv) रोहन ने चिड़ियाघर में शेर और _____ को देखा ।

प्रश्न - ६ वचन बदलिए -

(i) तारा





(ii) पौधा





(iii) ताला





(iv) पत्ता





प्रश्न - 7 सही मिलान करिये -

दस

५

पांच

७

सात

१०

एक

३

तीन

१

प्रश्न - ८ निम्नलिखित शब्दों के अर्थ लिखिए

- (i) साग - _____
- (ii) भूप - _____

प्रश्न - ९ दिए गए शब्दों के दो-दो लयात्मक शब्द लिखिए -

- (i) पैर _____
- (ii) खाना _____

प्रश्न - १० कविता पूरी करिये -

पैसा पास होता तो _____ चने लाते ,
चार में से एक चना _____ को खिलाते ।
चूहे को खिलाते तो _____ टूट जाता ,
दाँत टूट जाता तो बड़ा _____ आता ।

प्रश्न - ११ दिए गए गद्यांश को पढ़कर नीचे दिए गए प्रश्नों के उत्तर दीजिये -

एक बार एक छोटी सी तितली बाग में इधर उधर फूलों पर मंडरा रही थी । तितली के पंख बहुत कोमल और रंग -बिरंगे थे । उसके छः पैर थे । तितली फूलों को रस पी रही थी । वह हम सभी बच्चों को बहुत अच्छी लगी । सचमुच तितली बाग की रानी कहलाती है ।

निम्न प्रश्नों के उत्तर लिखिए -

- (i) तितली बाग में कहां मंडरा रही थी ?
उत्तर -

- (ii) तितली के पंख कैसे थे ?
उत्तर -

रिक्त स्थान भरिये -

- (i) तितली के _____ पैर थे ।
- (ii) सचमुच तितली बाग की _____ कहलाती है ।

(iii) _____ को खिलाते तो टॉय - टॉय गाता ,

चित्र वर्णन

नीचे दिए गए चित्र को देखकर कोई भी पाँच वाक्य लिखिए और चित्र में रंग भरिये -



दिए गए गद्यांश को पढ़कर नीचे दिए प्रश्नों का उत्तर दीजिये-

दो सहेलियाँ थी रीमा और सीमा । दोनों एक साथ पढ़ती और खेलती थी । एक दिन दोनों घर जा रही थी कि दो कुत्ते लड़ते हुए उधर आ गए । रीमा कुत्तों से बहुत डरती थी वह कुत्तों को देखकर भागने लगी और गिर गयी । उसके पैर से खून बहने लगा , सीमा जल्दी से उसके पास गयी और उसने रीमा के पैर पर अपना रुमाल बाँध दिया और उसे उसके घर ले गयी । रीमा कि माँ उसे डॉक्टर के पास ले गयी । उन्होंने सीमा कि बड़ी तारीफ की और उसे धन्यवाद कहा ।

दिए गए प्रश्नों के उत्तर एक शब्द में दीजिये-

प्रश्न-१ दोनों सहेलियों के नाम क्या थे ?

प्रश्न- २ - कौन कुत्तों से बहुत डरती थी?

प्रश्न -३ रीमा की माँ उसे कहा ले गयी?

प्रश्न -४ सहेली का बहुवचन रूप लिखिए -

दिए गए चित्र में रंग भरिये और कुत्ते के गले में रुस्सी बाँध दीजिये -



प्रश्न -५ सही उत्तर चुनिए -

१. रीमा किसको देखकर भागने लगी ?

क. कुत्तों को

ख. मुर्गी को

२. रीमा की माँ उसे कहा ले गयी?

क. डॉक्टर के पास

ख. दर्जी के पास

प्रश्न -६ दिए गए प्रश्न का उत्तर दीजिये-

क. सीमा ने पैर पर क्या बाँधा ?

Practice Sheet

Q1. . Fill in the blanks with suitable preposition (on; in; near; under)

1. The spoon is _____ the glass. (in / on)
2. The ball is _____ the door.(near / on)
3. The dog is sitting _____ the table. (near / in)
4. Birds fly _____ the sky. (under / in)
5. Butterflies are sitting _____ the flowers. (on /under)
6. The children are playing _____ the garden(in / on)
7. The boy hid his toys _____ the bed. (on /under)
8. The bee is sitting _____ the flower. (on / in)


Q2. Fill in the blank with is / am / are :


1. How old _____ you?
2. I _____ fine
3. What _____ your name?
4. Who _____ the monitor of the class?
5. There _____ seven days in a week.
6. These mangoes _____ sweet.
7. We _____ watching T. V.
8. My brother _____ a doctor.
9. It _____ a big dog.
10. Tom and Bob _____ players.


Q3. Fill in the blanks with 'has' or 'have'.

- | | |
|--|----------------------------------|
| 1.) Ram _____ one pen. | 2.) She _____ a storybook. |
| 3.) You _____ blue eyes. | 4.) The house _____ seven rooms. |
| 5.) Cows _____ horns. | 6.) I _____ a big house. |
| 7.) Manu _____ a pet dog. | 8.) We _____ new shoes. |
| 9.) I _____ two brother and two sisters. | 10.) A donkey _____ small ears. |


Q4. Complete the sentences with this;that;these; those

_____ is a horse. → 

_____ are apples. → 

_____ are birds. → 

_____ is an elephant. → 

_____ is a doll. → 

Q5. Rearrange the following words to make meaningful sentence.

1. going / am / I / school / to _____
2. friends / are / They _____
3. nice / My / are / very / parents _____
4. is / Tommy / my / pet / dog _____
5. very / is / It / hot _____
6. dress / I / new / have / a _____
7. food / tasty / cooks / My / mother _____

Q6. Punctuate the following sentences and rewrite them.

1. is it sunny outside _____
2. the pigeon is sitting on the road _____
3. Wow what a beautiful rainbow _____

4. When is your birthday _____

5. we are going to mumbai today _____

6. siya reeya piya and tia are sisters _____

Q7. Make sentences.

1. proud _____

2. plenty _____

3. often _____

4. string _____

5. tired _____

6. trick _____

Q8. Write meanings .

1. prick _____

5. string _____

2. afraid _____

6. Shooed _____

3. dozing _____

7. wish _____

4. crawl _____

8. pluck _____

Q9. Fill in the blanks to complete the words.

a.) h u _ _ _ y

b.) s _ _ o o _ _

c.) p l u _ _ _

d.) b _ _ e e _ _

e.) t u _ _ _ e d

f.) s c _ _ a p _ _ d

Q10. Answer the following questions.

What was the tiger doing when the mosquito came buzzing by?

Why did the tiger walk away?

What does the little bird do?

Who made Sundari?

How did Kalu's clothes become wet?

Q11. Answer in one word.

1. What was the name of Kalu's friend? _____
2. Who was Sundari ? _____
3. What falls on the ground? _____
4. Who were having fun on the tree? _____
5. Who came buzzing by? _____

Sanjay
18/6/2020



Name _____

Teacher's Sign: _____

Q1. Answer the following questions.

1. What are National festivals?

Ans. _____

2. What is the correct way to drink water?

Ans. _____

Q2. Answer in one sentence.

1. What are domestic animals?

Ans. _____

2. What is full moon?

Ans. _____

3. What are trees?

Ans. _____

Q3. Give two examples of each.

1. Two sources of water

2. Two creepers

3. Two animals that live on trees

4. Two vehicles pulled by engines

5. Two things we get from sun

Q4. Answer in one word.

1. Tonga and bullock cart are pulled by _____.
2. I am one of the greatest inventions of man _____.
3. I am called festival of lights _____.
4. I am small and weak, my stems are green. I am a _____.
5. I am made up of cement, bricks, iron and concrete. I am a _____.

Q5. Fill in the blanks by choosing the correct option from below.

(clean, Eid Mubarak, pet, important, sun)

1. A good house is neat and _____.
2. People wish each other _____ on Eid.
3. Dogs and parrots are _____ animals.
4. Water is very _____ for us.
5. The _____ is a big ball of fire.

Q6. Write T for true and F for false.

1. Republic day is celebrated on 26th January. ()
2. Buses and trucks have three wheels. ()
3. We get tea and coffee from plants. ()
4. We can count the number of stars in the sky. ()
5. Ant and butterflies are insects. ()

Q7. Circle the correct option.

1. We can go on the moon with the help of rocket / aeroplane.
2. Christmas is celebrated on 25th December / 25th February.
3. Cars and buses are means of water / road transport.
4. Drinking and cooking are two uses / wastage of water.
5. A rabbit / sparrow can fly.

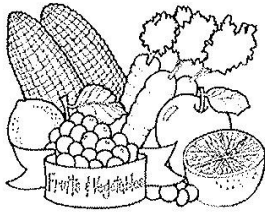
Q8. Match the following.



Wild Animal



Use of water





Air transport



We get from plants

Q9. Draw, colour and name

1. One Climber plant 2. Any one water animal



REVISION WORKSHEET

Q1. Write the number names:

a. 12 -----

b. 28 -----

c. 49 -----

d. 14 -----

e. 53 -----

Q2. Write after , before and between numbers:

29		31
	40	
66	67	
78		80
	51	
		10

Q3. Write the Place value of given numbers:

a. 62 tens-----ones-----

b. 80 tens-----ones-----

c. 16 tens-----ones-----

d. 99 tens-----ones-----



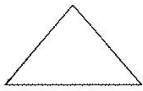
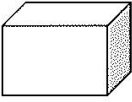


Q4. Add the following sums:

T O	T O	T O	T O
3 7	4 8	7 1	2 5
+ 2 1	+ 3 4	+ 1 8	+ 1 7

Q5. Subtract the following sums:

T O	T O	T O	T O
6 8	4 2	5 0	8 5
- 2 4	- 1 3	- 1 8	- 2 5

Q6. Name the shapes:

- a.  _____
- b.  _____
- b.  _____
- d.  _____
- e.  _____
- f.  _____

Q7. Follow the pattern:


- a. 1 2 1 2 _____, _____, _____.
- b. 2 5 8 11 _____, _____, _____.
- c. 9 12 15 18 _____, _____, _____.
- d. ? ? ! ? ? _____, _____, _____.

Q8. Arrange the numbers in increasing order:

- a. 38 , 83 , 18 , 40. _____
- b. 13 , 11 , 31 , 41. _____

Q9. Count the coins:

Write down how much money is shown-



- Q10.** a. Cost of ice cream is Rs.10. What is the cost of 3 ice creams? -----
 b. Cost of chocolate is Rs.5. What is the cost of 7 chocolates?-----


Q11. Answer the following questions:

- a. A shape of full moon is -----.
 b. A number comes before 40.-----
 c. Rs. 3 = 1+ ----.
 d. Numeral of sixty five is -----
 e. Name any one object smaller than bucket. -----

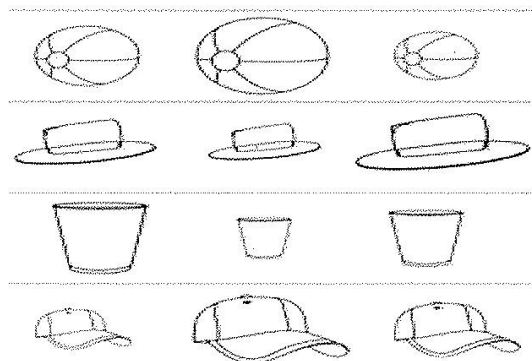
Q12. Mental maths:

- a. $3 + 3 + 3 + 3 =$ -----
 b. $50 + 50 =$ -----
 c. $9 - 7 =$ -----
 d. $6 + 6 + 6 + 6 =$ -----
 e. 46 , 47, 48 , 49 ,----- , -----
 f. 73 , 72 , 71 ,----- , -----
 g. $7 \times 7 =$ -----
 h. $4 \times 9 =$ -----
 i. $9 \times 7 =$ -----
 j. $17 - 5 =$ -----

Q13. Tick the thicker object:



b) Colour the shortest object:



Q14. Join the dots and name the shape:



It is ----- shape.





























Give one example ^{of the} above shape.-----

Q15. Measure your T.V. using your Hand span.


My **T.V.** is ----- hand span  long.


Q 16. Children of class 1 voted for their favourite shapes in class activity.

Favourite Shape


					
					
					
					
					
					
					
Triangle	Square	Rectangle	Pentagon	Hexagon	Octagon


1) Which shape got the most votes? _____

2) How many votes did the square get? _____ 

3) How many votes did the triangle get? _____ 

4) How many votes did the pentagon get? _____ 

5) How many votes did the hexagon get? _____ 

6) How many votes did the octagon get? _____ 

7) Which shape got the fewest votes? _____

Amey
18/9/2020

Subject: Computer Revision sheet

Class & Sec.: I

Date: 18.03.2020

Name: _____ **Invigilator's Sign:** 

Q.1 Tick the correct answer:

1. _____ opens an item.

(a) Single-click ☐ (b) Double-click ☐ (c) Scroll ☐

2. Which Tool is used to erase a drawing?

(a) Rectangle Tool ☐ (b) Eraser Tool ☐ (c) Line Tool

☐

3. Which storage device is used to store books and notebooks?

(a) Bag ☐ (b) Refrigerator ☐ (c) Pen drive ☐

Q.2. Fill in the blanks:

Hints: (Clicking, mouse, store, 2, Oval)

1. A keyboard has _____ enter keys.

2. A _____ helps us to play games.

3. Pressing the mouse button once is called _____.

4. We can draw a circle using _____ tool.

5. Storage places are used to _____ things.

Q.3. Write True or false:

1. Data can be words, pictures, numbers or sound. _____

2. A computer can store data in a Pen drive. _____

3. Eraser Tool is used to paint a picture. _____

4. A mouse has 3 or 4 buttons. _____

Q.4. Answer the following:

1. Which Tool is used to fill colour in an object?

2. Where does a computer store its data?

3. Where do you store clothes, books and toys?

Q.5. Circle the odd one out:

- i) A) Almirah B) Bag C) Mouse
- ii) A) Brush Tool B) Line Tool C) CPU
- B)

Q.6. Rearrange the jumbled words:

i)	H	A	S	E	P	
ii)	T	A	I	N	P	
iii)	R	A	E	S	E	R

Q.7 Draw and colour any storage device.

