

General Instructions:

- It is mandatory for every child to maintain the assignments given in a note book for further reference.
 - The work given should be done neatly and legible handwriting.
 - Let us keep ourselves engaged during the lockdown period.
-

PLURAL S AND POSSESSIVE 'S; OF

Q1. Read the passage. Recognize and write the singular possessive nouns in column A and plural possessive nouns in column B.

The King's palace is beautiful. The palace's garden has many flowers. The flowers' sweet smell fills the air. The trees' branches shade the garden paths. There are birds on the branches. The birds' sing beautifully. The sun's rays are falling on the palace.

Column A

Column B

Q2. Complete with 's or ' :

1. My brother ___son has a red bicycle .
2. His parents ___house is in Mumbai.
3. I wrote in my friend___ diary.
4. Rakhi and Shreyans ____jackets are kept on the shelf.

Q3. Complete the given sentences with 's or of:

- a. The _____ is sharp.(tip/ your pen)
- b. _____ is short.(Radha/dress)
- c. The _____ is bright.(colour/wall)
- d. _____ is long.(Pinnochio/nose)

Q4. Read the passage and answer the questions given below:

Sagar will be seven years old on Sunday. He is celebrating his birthday by having a party. He invited 15 students from his class. At the party everyone will play games, dance and eat pizza, pasta, cake and ice-cream. Her mother has baked a delicious chocolate cake for him. He is eagerly waiting for Sunday.

a. How old will Sagar be on Sunday?

b. What will the children do at the party?

c. How do you think Sagar feels about his party?

General Instructions:

- It is mandatory for every child to maintain the assignments given in a note book for further reference.
 - The work given should be done neatly and legible handwriting.
 - Let us keep ourselves engaged during the lockdown period.
-

1. निम्नलिखित गद्यांश को पढ़ें और नीचे दिए गए प्रश्नों के उत्तर दें।

गुरुकुल में पढ़ने वाले छात्रों की पढ़ाई पूरी होने पर एक दिन गुरुजी ने सभी छात्रों को मैदान में इकट्ठा होने के लिए कहा। सभी शिष्य मैदान में आकर खड़े हो गए। गुरुजी ने उनसे कहा, प्रिय शिष्यों मैं चाहता हूँ कि यहाँ से जाने से पहले आप सब एक बाधा दौड़ में भाग लें। इस दौड़ में आपको एक अँधेरी सुरंग से गुजरना होगा। सभी शिष्य सुरंग से गुजरे जहाँ जगह-जगह नुकीले पत्थर पड़े थे। दौड़ पूरी होने पर गुरुजी ने कहा, कुछ शिष्यों ने दौड़ जल्दी पूरी कर ली और कुछ ने बहुत अधिक समय लगा दिया, भला ऐसा क्यों? कुछ शिष्यों ने जवाब दिया कि रस्ते में नुकीले पत्थर थे जिन्हें हम चुनकर जेब में रखते जा रहे थे ताकि पीछे आने वालों को पीड़ा न हो। गुरुजी ने उन सभी शिष्यों को बुलाया जिन्होंने पत्थर चुने थे और कहा कि जिन्हें तुम पत्थर समझ रहे थे, वे वास्तव में बहुमूल्य हीरे हैं जिन्हें मैंने सुरंग में डाला था। ये हीरे तुम सबका उपहार हैं क्योंकि तुमने दूसरों की पीड़ा को समझा। यह दौड़ जिंदगी की सच्चाई को बताती है कि सच्चा विजेता वही है जो इस दौड़ती दुनिया में दूसरों का भला करते हुए आगे बढ़ता है।

(क) गुरुजी ने शिष्यों को कहाँ और क्यों बुलाया था?

(ख) शिष्यों को सुरंग में किस कठिनाई का सामना करना पड़ा?

(ग) गुरुजी ने शिष्यों को क्या दिया और क्यों?

(घ) यह दौड़ जिंदगी की कौन-सी सच्चाई बताती है?


2. निम्नलिखित अक्षर का उपयोग करके 2-2 शब्द बनाएँ ।

क्ष - _____
त्र - _____
ज्ञ - _____
श - _____
फ - _____

3. निम्नलिखित शब्दों का वाक्य में प्रयोग करिये ।

- यहाँ - _____
- परन्तु- _____
- और- _____
- इसलिए - _____
- स्वयं- _____

4. 3-4 वाक्यों में चित्र का वर्णन करें।



General Instructions:

- It is mandatory for every child to maintain the assignments given in a note book for further reference.
 - The work given should be done neatly and legible handwriting.
 - Let us keep ourselves engaged during the lockdown period.
-

CHAPTER - 1 (NUMBER SYSTEM)

Q.1 Fill up:

- a) The smallest 6-digit number is_____
- b) The largest 5-digit number is_____
- c) The place value of 5 in 2548298 is 5lakhs or_____
- d) The number that comes between 346548 and 345650 is_____

Q.2 Write the number names for the given numerals:

- a) 984002 b) 450981 c) 8879650 c) 2834689

Q.3 Write the numerals for the given number names:

- a) Two lakhs three hundred and seven
- b) Fifty six lakhs five thousand three hundred and twenty eight
- c) Ninety five thousand and seven
- d) Four lakh sixty eight thousand two hundred and sixty nine

Q.4 Write the following numbers in expanded form:

- a) 67,34,902 b) 4,89,300 c) 39,567 c) 5,78,221

Q.5 Write short form of the given numbers:

- a) $200000 + 70000 + 8000 + 400 + 30 + 4$
- b) $6000000 + 500000 + 6000 + 70$
- c) $700000 + 10000 + 400 + 8$
- d) $30000 + 6000 + 300 + 30 + 3$

Q.6 Write the place value and face value of underlined digit:

- a) 67,45,789 b) 8,43,602 c) 9,21,347 d) 2,56,001

Q.7 Insert >, < or = in the given space:

- a) 2398456 _____ 2398456
b) 6789300 _____ 988960
c) 414716 _____ 500000
d) 200000 _____ 200001

Q.8 Write the numerals:

- a) 6 ten thousand, 4 lakhs, 3 thousand, 1 hundred, 2 tens, 7 ones
b) 8 thousand, 5 tens, 2 lakhs, 4 ones, 2 hundreds
c) 5 lakhs, 9 ones, 8 tens, 1 ten thousand

Q.9 Round off the following to:

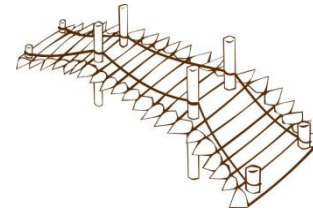
	Nearest 10	Nearest 100	Nearest 1000
a) 3678	_____	_____	_____
b) 9284	_____	_____	_____
c) 8888	_____	_____	_____
d) 7360	_____	_____	_____

General Instructions:

- It is mandatory for every child to maintain the assignments given in a note book for further reference.
- The work given should be done neatly and legible handwriting.
- Let us keep ourselves engaged during the lockdown period.

Q1. From the grid, find the place where these are used to travel.

A	S	S	A	M	X	Y	Z	O
G	H	K	E	R	A	L	A	P
R	A	J	A	S	T	H	A	N
O	X	L	A	D	A	K	H	X
G	U	J	A	R	A	T	H	S
K	O	L	K	A	T	A	T	R



- a. Bamboo bridge : _____ b. Vallam : _____
- c. Trolley: _____ d. Camel cart: _____
- e. Cycle Rickshaw : _____ f. Jugad : _____

Q2. Observe the pattern and fill in:

- a. Camel : camel cart :: _____ : bullock cart
- b. Cement bridge : _____ :: bamboo bridge : not strong
- c. Rocky path : Uttaranchal :: snowy path : _____
- d. Deaf people : hearing aid :: Braille : _____

Q3. Fill in the blanks from the options given below.

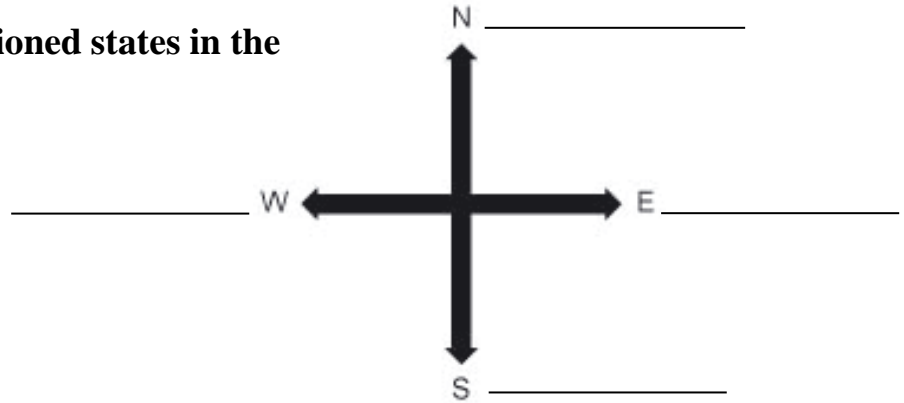
(mountain, hills, plains, plateau, Thar, desert, peninsula)

1. A flat and low area of land is called _____.
2. A plain and uneven area of high land is called _____.
3. A piece of land that is surrounded by water bodies on three sides is called _____.





4. A dry, barren, treeless region, usually sandy is called _____.
5. _____ desert is known as the largest desert of India.
6. A _____ is very high land mass with sloping sides and peaks. Smaller mountains are called as _____.

Q4. Mention the below mentioned states in the correct direction.

1. Jammu and Kashmir
2. Assam
3. Gujarat
4. Kerala



Q5. Name the four armed forces in India.

<p>_____ is the land-based branch of Indian Armed force.</p> 	<p>_____ is the air arm of the Indian Armed Forces.</p> 
<p>_____ is the naval branch of the Indian Armed Forces.</p> 	<p>_____ is an armed force that protects India's maritime interests</p> 



Aseem said, when he went to Rajasthan in this summer vacations, he sat in the bullock cart and had a wonderful ride in the deserts. Do you think he is right? Why?

Q6. Name any five places where pulley system is used in our daily lives.

Q7. Do you think, girls should be given equal opportunities as boys for education?
